

O. P. JINDAL SCHOOL, SAVITRI NAGAR
Annual Examination (2023 – 2024)

Class / Section: I ()

MM: 40

Subject: Mathematics

Time: 2 Hrs.

Name: _____

Roll No.: _____

Invigilator's Sign: _____ Marks Obtained: _____

Examiner's Sign: _____

General Instructions: All questions are compulsory.

1) Fill in the blanks:**(4Marks)**





i) $2 + 2 + 2 + 2 + 2 =$ _____ x _____ (write the multiplication facts)

ii) _____ x 5 = 15

iii) The day between Saturday and Monday is _____ .

iv) $60 - 1 =$ _____

2) Answer the questions:**(3Marks)**

 ₹ 35	 ₹ 15	 ₹ 30	 ₹ 22
---	---	--	---

i) Which of the toys costs most ? _____ .

ii) Which cost less: the teddy bear or the cap ? _____ .

iii) How much do the car and ball cost together ? _____ .

3) Multiply :

(3Marks)

i) $10 \times 5 =$ _____

ii) $4 \times 7 =$ _____

iii) $2 \times 8 =$ _____

4) Solve :

(4Marks)

i) $\begin{array}{r} 99 \\ - 31 \\ \hline \end{array}$

ii) $\begin{array}{r} 50 \\ + 37 \\ \hline \end{array}$

iii) $\begin{array}{r} 85 \\ - 44 \\ \hline \end{array}$

$\begin{array}{r} 99 \\ - 31 \\ \hline \end{array}$

$\begin{array}{r} 50 \\ + 37 \\ \hline \end{array}$













$\begin{array}{r} 85 \\ - 44 \\ \hline \end{array}$

iv) $\begin{array}{r} 49 \\ + 20 \\ \hline \end{array}$

$\begin{array}{r} 49 \\ + 20 \\ \hline \end{array}$

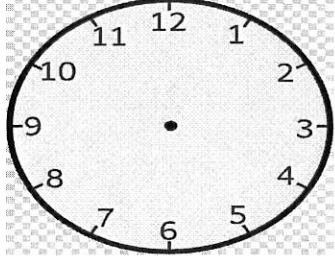

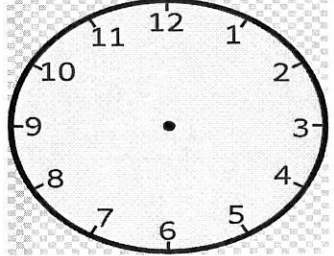
5) Find the total money in each row :

(4Marks)

			=
			=
			=
			=

6) Draw the hands on the clock to show the time:

(2Marks)

		
1 Hour before	10 o' clock	1 Hour later

7) Word problems :

(4Marks)

i) A man had **69** kites . He sold **18** kites out of them . How many kites were left with him ?

ii) Geeta had **26** pens. She bought **12** pens more . How many pens does she have now?

8) Write the missing numbers :

(2Marks)

3	6		12			21	
---	---	--	----	--	--	----	--

9) Write the numbers :

(4Marks)

i) Ninety one _____

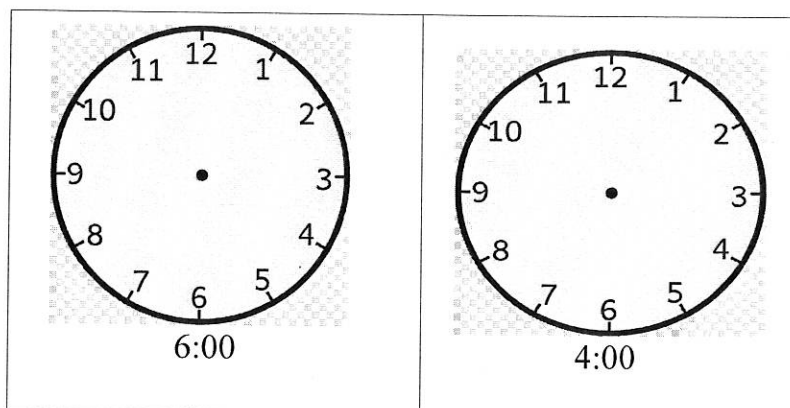
ii) Forty two _____

iii) Eighty six _____

iii) One-hundred _____

10) Draw the hands on clock to show the time :

(2Marks)



11) Write true or false :

(4Marks)

i) 6 times 2 = 16 _____

ii) 5 tens + 9 ones = 59 _____

iii) 68 + 1 = 65 _____

iv) 100 comes just after 99 _____

12) Match :

(4Marks)

i) January	Independence Day
ii) August	Children's Day
iii) November	Gandhi Jayanti
iv) October	Republic Day

